



*Up-to-date Questions and Answers from authentic resources to improve knowledge and pass the exam at very first attempt. ----- Guaranteed.*



*WorkKeys Dumps  
WorkKeys Braindumps  
WorkKeys Real Questions  
WorkKeys Practice Test  
WorkKeys Actual Questions*



**Admission-Tests**

# WorkKeys

*WorkKeys Assessment*



Question: 116

Cheap Call charges \$0.12 per minute for long distance calls. Slim Chance charges \$0.10 per minute plus a flat fee of \$6.95 per month. If your office makes 5 hours and 23 minutes worth of phone calls this month, which company will save you more and by how much?

- A. Slim Chance by \$39.25
- B. Cheap Call by \$38.76
- C. Cheap Call by \$6.39
- D. Slim Chance by \$3.23
- E. Cheap Call by \$0.49

Answer: E

Question: 117

Envelopes cost \$40.95 per 1000 if you buy at least 1000 envelopes or \$77.90 per 2000 if you buy at least 2000 envelopes. Which is the better buy and by how much?

- A. 1000 envelopes by \$0.002
- B. 1000 envelopes by \$0.038
- C. 2000 envelopes by \$0.045
- D. 2000 envelopes by \$0.002
- E. They are equal in cost.

Answer: A

Question: 118

The Bakery has 10 dozen donuts. They sold  $\frac{2}{3}$  of the donuts. How many donuts did they sell?

- A. 126 donuts
- B. 120 donuts
- C. 84 donuts
- D. 48 donuts
- E. 7 donuts

Answer: C

Question: 119

A local swimming pool contractor is going to install a circular swimming pool having a diameter of 27 feet. How much area will the pool take up of the customers yard?

- A. 84.78 ft<sup>2</sup>
- B. 286.13 ft<sup>2</sup>
- C. 572.27 ft<sup>2</sup>
- D. 1144.53 ft<sup>2</sup>
- E. 2289.06 ft<sup>2</sup>

Answer: C

Question: 120

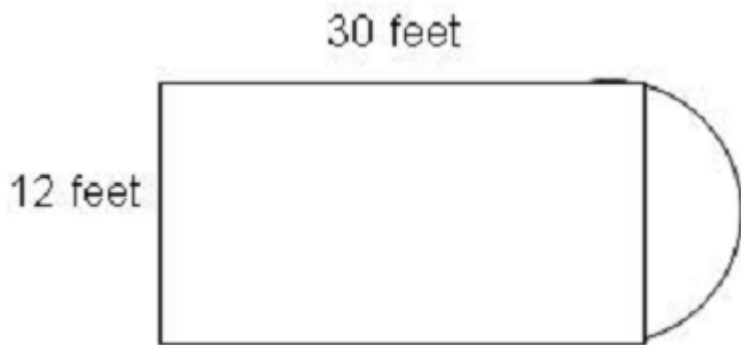
How many acres are contained in a parcel of land 150 feet wide and 250 yards deep?

- A. 0.86 acres
- B. 1.75 acres
- C. 2.58 acres
- D. 5.16 acres
- E. 539.03 acres

Answer: C

Question: 121

You have been asked to resurface the floor shown below. It is a rectangle with a semicircle at one end. What is the area of the floor?



- A. 360 ft<sup>2</sup>
- B. 416.52 ft<sup>2</sup>
- C. 473.04 ft<sup>2</sup>
- D. 586.08 ft<sup>2</sup>
- E. 812.16 ft<sup>2</sup>

Answer: B

Question: 122

A landscaping firm is planning a new garden display. The garden will measure 4 feet by 12 feet. Each flower takes up 9 square inches. If the firm orders less than 500 flowers, the cost is \$0.45 each; if they order over 500, the cost is \$0.36 each. How much will it cost to plant the flower garden?

- A. \$2.40
- B. \$76.80
- C. \$194.40
- D. \$276.48
- E. \$345.60

Answer: D

Question: 123

Kaylen worked the following hours during one week. She is paid \$9.50 per hour for the first 40 hours of work. After 40 hours she is paid 1 times her regularly hourly rate. How much money did Kaylen earn this week?

Day	Hours worked
Monday	7
Tuesday	8
Wednesday	6.5
Thursday	12
Friday	8.75

- A. \$401.38
- B. \$412.06
- C. \$420.38
- D. \$522.50
- E. \$562.32

Answer: B

Question: 124

Your parents have given you permission to repaint your bedroom. The dimensions of the room are 13 feet by 14 feet, and it is 8 feet high. The room has two windows with dimensions 3 feet by 4 feet, and the doorway measures 7 feet by 3 feet. According to the directions on the can, one gallon of paint will cover 300 square feet. You plan on putting on two coats of paint. Determine how many gallons of paint you will need to cover the walls and ceiling.

Answer: A

Question: 125

A savings account earns 4% annual interest compounded quarterly. How much interest would \$500 earn if it was invested for one year?

- A. \$20.00
- B. \$20.30
- C. \$54.20
- D. \$84.93
- E. \$200.00

Answer: B

Question: 126

Charter Pools is installing a new circular pool in a customers backyard. The customer has a well and is not able to fill the pool. Charter Pools will haul in water, but they need to determine how many gallons of water they will need. The truck can carry 6500 gallons of water. The pool is 27 feet in diameter and 54 inches deep. How many gallons are needed to fill the pool?

- A. 535 gallons
- B. 2576 gallons
- C. 19,264 gallons
- D. 30,902 gallons
- E. 924,661 gallons

Answer: C

Question: 127

Barb worked the following hours during one week. She is paid \$12.50 per hour for the first 40 hours of work. After 40 hours she is paid 1 times her regularly hourly rate unless it is a Sunday or a holiday then she earns double time for those particular hours. How much money did Barb earn this week?

Day	Hours worked
Sunday	5
Monday	7
Tuesday	0
Wednesday	6.5
Thursday—Thanksgiving	9
Friday	8.75
Saturday	6

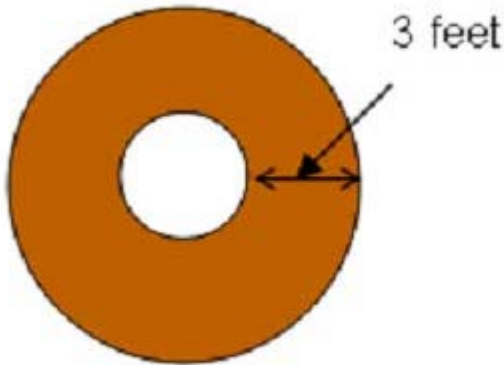
- A. \$528.13
- B. \$556.25

- C. \$640.63
- D. \$665.63
- E. \$703.13

Answer: E

Question: 128

A landscape company plans to install mulch around 3 trees in a customers yard. The trees have a diameter of 3 feet, and mulch is to be placed 3 feet around the tree and 4 inches deep. How many cubic yards of mulch are needed?




- A.  $\frac{3}{4}$  cubic yard
- B. 1 cubic yard
- C.  $1\frac{1}{2}$  cubic yard
- D.  $2\frac{1}{4}$  cubic yard
- E. 5 cubic yards

Answer: D

Question: 129

Find the area of the shaded sections of the wooden frame shown below if the picture itself is 16 inches by 8 inches, and the overall dimensions are 20 inches by 12 inches.



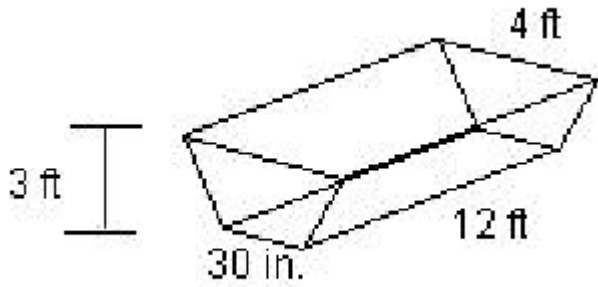
- A. 18 in<sup>2</sup>

- B. 20 in<sup>2</sup>
- C. 36 in<sup>2</sup>
- D. 48 in<sup>2</sup>
- E. 72 in<sup>2</sup>

Answer: E

Question: 130

The water tank on a rancher's truck holds 250 gallons. Can this water trough shown be completely filled in one trip? If not, how many trips must be made?



- A. It can be filled in one trip.
- B. 2 trips
- C. 3 trips
- D. 4 trips
- E. 5 trips

Answer: D



# SAMPLE QUESTIONS

*These questions are for demo purpose only. **Full version** is up to date and contains actual questions and answers.*

*Killexams.com is an online platform that offers a wide range of services related to certification exam preparation. The platform provides actual questions, exam dumps, and practice tests to help individuals prepare for various certification exams with confidence. Here are some key features and services offered by Killexams.com:*

**Actual Exam Questions:** *Killexams.com provides actual exam questions that are experienced in test centers. These questions are updated regularly to ensure they are up-to-date and relevant to the latest exam syllabus. By studying these actual questions, candidates can familiarize themselves with the content and format of the real exam.*

**Exam Dumps:** *Killexams.com offers exam dumps in PDF format. These dumps contain a comprehensive collection of questions and answers that cover the exam topics. By using these dumps, candidates can enhance their knowledge and improve their chances of success in the certification exam.*

**Practice Tests:** *Killexams.com provides practice tests through their desktop VCE exam simulator and online test engine. These practice tests simulate the real exam environment and help candidates assess their readiness for the actual exam. The practice tests cover a wide range of questions and enable candidates to identify their strengths and weaknesses.*

**Guaranteed Success:** *Killexams.com offers a success guarantee with their exam dumps. They claim that by using their materials, candidates will pass their exams on the first attempt or they will refund the purchase price. This guarantee provides assurance and confidence to individuals preparing for certification exams.*

**Updated Content:** *Killexams.com regularly updates its question bank and exam dumps to ensure that they are current and reflect the latest changes in the exam syllabus. This helps candidates stay up-to-date with the exam content and increases their chances of success.*

**Technical Support:** *Killexams.com provides free 24x7 technical support to assist candidates with any queries or issues they may encounter while using their services. Their certified experts are available to provide guidance and help candidates throughout their exam preparation journey.*

For More exams visit <https://killexams.com/vendors-exam-list>  
Kill your exam at First Attempt....Guaranteed!